

Name:

Roll No:

Class: Section:

Date:

WORKSHEET

2

COMPUTER – A WONDERFUL MACHINE





Chapter-1

A. Match the objects shown in Column A with their names given in Column B.


Column A

1. Abacus
2. Washing Machine
3. Air Conditions
4. Car

Column B

- a. 
- b. 
- c. 
- d. 

B. Circle natural things in green colour and circle man-made things in red colour.



C. Answer in one word:

1. Name a machine that can do sums to learn the math. _____
2. name a machine that has colourful beads used for counting. _____
3. Name a one that can be used for travelling. _____
4. Name a one machine that can be made up of man-made things. _____