

Name: .....

Roll No: .....

Class: ..... Section: .....

Date: .....


## EVOLUTION OF COMPUTERS

### Chapter-1

#### A. Tick (✓) the correct option.

1. Which generation of computers have used IC?
  - a. Second generation ☐
  - b. Third generation ☐
  - c. First generation ☐
2. Early man carved marks on ..... in order to keep the records.
  - a. computer ☐
  - b. clay ☐
  - c. calculator ☐
3. Which of these was the first microprocessor?
  - a. Intel 4004 ☐
  - b. 8086 ☐
  - c. Intel 8085 ☐


#### B. Identify the below components and write their names.




1. ....



2. ....



3. ....



4. ....

#### B. Fill in the blanks using the hints given below:

**Hints:** Mark-I, Magnetic tapes, Tabulating machine

1. .... was invented by Herman Hollerith.
2. .... were used by second generation computers.
3. .... was the name of first electromechanical computer.