

Name:

Roll No:

Class: Section:

Date:

ALGORITHM AND FLOWCHART

Chapter-8

A. Fill in the blanks using the hints given below:

Hints: Connectors, Consistent, Instructions, Algorithm, Assembler

1. An is a collection of steps in a sequential manner.
2. The are usually labeled in pairs to show matching jump points.
3. A good flowchart will use symbols.
4. A computer language is the means by which are transmitted to the computer.
5. An is a program used to translate assembly language into machine language.

B. Answer the following questions:




1. What is meant by a flowchart?

.....

2. What is an algorithm?

.....

C. Match the symbols with their functions used in flowcharts.

- | | |
|--|---|
| 1.  | a. Shows a process or action step |
| 2.  | b. Indicates a question or branch in the process flow |
| 3.  | c. Start and stop points of the flowchart |