

Worksheet

Name:

Roll No: Class: Section:

Date:

ANIMATION IN SCRATCH

Chapter-9


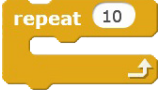


1. Write the names of the following blocks:

- (a) 
- (b) 
- (c) 
- (d) 

2. Answer the following questions:

- (a) Which block category is used to move the sprite on the stage?
- (b) What is XY plane?
- (c) Write the name of any one conditional block.
- (d) What is the use of loop block?
- (e) What is the use of sensing blocks?
- (f) Write the names of any two pen blocks.
- (g) Write the names of any two looks blocks.
- (h) What is the use of the green flag icon?

3. Write a short note on the following blocks:

- (a) 
- (b) 
- (c) 
- (d) 
- (e) 
- (f) 

Class -9