

Worksheet

1

Name:

Roll No: Class: Section:

Date:

DRAWING SHAPES IN SCRATCH

Chapter-8

A. Tick (✓) the correct option.

1. Which of the following command is used to draw circles and semicircles?

a. Repeat

☐

b. Turn

☐

c. Stamp

☐

2. Which block is used to duplicate the sprite's image onto the stage?

a. Pen up

☐

b. Stamp

☐

c. Clear

☐

3. Which block is used to draw shapes?

a. Pen

☐

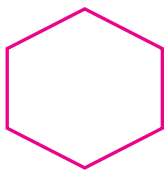
b. Control

☐

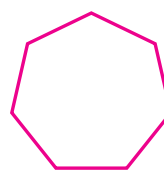
c. Motion

☐


B. Identify the below figures and write their names.




1.



2.



3.



4.

C. Fill in the blanks using the hints given below:

Hints: Motion, Set pen color to, anti-clockwise direction

1. block changes pen colour based on your choice from colour picker.

2. The **turn**  **degrees** block will turn the Sprite in by the specified number of degrees.

3. The Turn block is under the blocks menu.