

Worksheet

Name:
Roll No: Class: Section:
Date:

ALGORITHM AND FLOWCHART

Chapter-8





A. Read the clues and answers the following.

1. It shows the direction in which the process flows.
2. It represents the information entering the system.
3. It is the set of instructions to perform a specific task.
4. It is the process of writing a program.

B. Write 'T' for true and 'F' for false.

1. An algorithm can be used for manipulating data.
2. Connector in a flowchart acts like a start point.
3. Process box is used to show a process or action in a flowchart.

C. Write the use of the following symbols:

1. 
2. 
3. 
4. 
5. 