

# Worksheet

2

Name: .....

Roll No: ..... Class: ..... Section: .....

Date: .....

## COMPUTER—A WONDERFUL MACHINE

### Chapter-1

#### A. Match the following.


1. Abacus

a.




2. Washing Machine

b.



3. Air Conditioner

c.




4. Car

d.



#### B. Circle natural things using green crayon and man-made things using red crayon.



#### C. Answer in one word.

1. Name a machine that can do sums to learn maths.

.....

2. Name a machine that has colourful beads used for counting.

.....

3. Name a machine that can be used for travelling.

.....