

# Worksheet

1

Name: .....

Roll No: ..... Class: ..... Section: .....

Date: .....





## GUI OPERATING SYSTEM—AN INTRODUCTION

### Chapter-2

#### A. Tick (✓) the correct option.

- Which of these is a moving pattern or animation on the screen?  
a. Background ☐ b. Screen saver ☐ c. Icon ☐
- Which of these is a long bar at the bottom of the desktop?  
a. Clock ☐ b. Taskbar ☐ c. Start button ☐
- Which of these is a mouse pointer used for pointing and selecting?  
a. Busy ☐ b. Normal ☐ c. I Beam ☐
- ..... helps to quickly open files or folders by double-clicking them.  
a. Taskbar ☐ b. Icons ☐ c. Gadgets ☐

#### B. Match the following mouse pointer shapes with their functions:

-  a. Used for pointing, and dragging the items
-  b. Used for moving pictures.
-  c. Computer is busy and wants you to wait
-  d. Used for inserting text in a document

#### C. Write 'T' for true and 'F' for false.

- Double-headed Arrow is used for inserting text in a document. ....
- Taskbar appears on the Start button. ....
- Windows 10 is an operating system software. ....