

Worksheet

1

Name:

Roll No: Class: Section:

Date:


EVOLUTION OF COMPUTERS

Chapter-1

A. Tick (✓) the correct option.

1. Which generation of computers have used IC?
 - a. Second generation ☐
 - b. Third generation ☐
 - c. First generation ☐
2. Early man carved marks on in order to keep the records.
 - a. computer ☐
 - b. clay ☐
 - c. calculator ☐
3. Which of these was the first microprocessor?
 - a. Intel 4004 ☐
 - b. 8086 ☐
 - c. Intel 8085 ☐


B. Identify the below components and write their names.




1.



2.



3.



4.

B. Fill in the blanks using the hints given below:

Hints: Mark-I, Magnetic tapes, Tabulating machine

1. was invented by Herman Hollerith.
2. were used by second generation computers.
3. was the name of first electromechanical computer.