

# Worksheet

2

Name: .....

Roll No: ..... Class: ..... Section: .....

Date: .....




## DRAWING SHAPES IN SCRATCH

### Chapter-6

#### A. Write 'T' for true and 'F' for false.

1. A hexagon has seven sides. ....
2. Control block is used to draw shapes. ....
3. We cannot draw shapes in scratch. ....

#### B. Match the following:

- |  |  |
|--|--|
| 1.   | a. To duplicate the sprite's image onto the stage.                   |
| 2.  | b. To put sprite's pen up  |
| 3.  | c. To change the pen colour based on your choice from colour picker. |

#### C. Answer the following questions:

1. What is total sprite trip?  
.....
2. Which block is used to change the direction of the sprite?  
.....
3. What is a regular polygon?  
.....