

# Worksheet

2

Name: .....

Roll No: ..... Class: ..... Section: .....

Date: .....

## COMPUTER—A WONDERFUL MACHINE

### Chapter-1

#### A. Match the following:


1. Abacus

a.




2. Washing Machine

b.



3. Air Conditioner

c.




4. Car

d.



#### B. Circle natural things in green colour and circle man-made things in red colour.



#### C. Answer in one word.

1. Name a machine that can do sums to learn the math. ....

2. Name a machine that has colourful beads used for counting. ....

3. Name a machine that can be used for travelling. ....

4. Name a machine that can be made by humans. ....