

# Worksheet

1

Name: .....

Roll No: ..... Class: ..... Section: .....

Date: .....


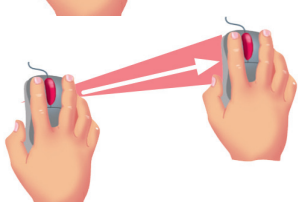

## USES OF A MOUSE

### Chapter-6

#### A. Tick (✓) the correct option.

- Which of these is used to select an icon on the desktop?
  - Single-click ☐
  - Double-click ☐
  - Scroll ☐
- A small arrow on the monitor screen is called .....
  - mouse pointer ☐
  - keyboard ☐
  - Monitor ☐
- What is the pressing and releasing any button of a mouse called?
  - pointing ☐
  - dragging ☐
  - clicking ☐

#### B. Match the following:

- 
  - Drag
- 
  - Double-click
- 
  - Single-click

#### C. Write 'T' for true and 'F' for false.

- Right click is used to display shortcut menu. ....
- We cannot point to things on the computer. ....
- To hold a mouse properly, middle finger is placed on the right button. ....
- The small arrow moving on the pointer screen is called pointer. ....
- We cannot use the mouse by pressing its buttons. ....