

# Worksheet

1

Name: .....

Roll No: ..... Class: ..... Section: .....

Date: .....

## THE COMPUTER SYSTEM

### Chapter-1

#### A. Match the following:

1.



a. Mouse

2.



b. CPU

3.



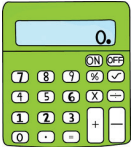


c. Monitor

4.



d. Keyboard

#### B. Look at the machines and fill in the missing boxes to complete the IPO cycle.

Machine	Input	Process	Output
 Calculator	Pressing Numbers and Symbols		Calculated Answer
 Water purifier		Purifies Water	Clean Drinking Water
 Washing machine	Dirty Clothes	Washing Clothes	