

Worksheet

2

Name:

Roll No: Class: Section:

Date:

COMPUTER—A WONDERFUL MACHINE

Chapter-1

A. Match the following:


1. Abacus

a.




2. Washing Machine

b.



3. Air Conditioner

c.




4. Car

d.



B. Circle natural things in green colour and man-made things in red colour.



C. Answer in one word.

1. Name a machine that can do sums to learn the math.

.....

2. Name a machine that has colourful beads used for counting.

.....

3. Name a machine that can be used for travelling.

.....

4. Name a machine that can be made by humans.

.....