

Worksheet

1

Name:

Roll No: Class: Section:

Date:

ALGORITHM AND FLOWCHARTS

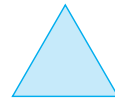
Chapter-4

A. Tick (✓) the correct option.

1. Which of the following is the symbol of input and output box in a flowchart?



b.



d.



2. An is a set of steps in a sequential manner to solve a problem or to complete a task.

a. symbol



b. start



c. algorithm




d. end



B. Match the following symbols used in Flowchart with their names:

1. Process

a.




2. Input/Output

b.




3. Connector

c.



4. Decision

d.



C. Fill in the blanks using the hints given below:

Hints: Flowchart, Connectors, Programming

1. are usually labelled in pairs to show matching jump points.

2. is step-by-step instructions to the computer.

3. A computer programmer draws a before writing a computer program.