

Worksheet

1

Name:

Roll No: Class: Section:

Date:

CREATING SHAPES IN SCRATCH

Chapter-7

A. Tick (✓) the correct option.

1. Which of the following command is used to draw circles and semicircles?

a. Repeat

☐

b. Turn

☐

c. Stamp

☐

d. None of these

☐

2. Which block is used to duplicate the sprite's image onto the stage?

a. Pen up

☐

b. Stamp

☐

c. Clear

☐

d. Motion

☐

3. Which block is used to draw shapes?

a. Pen

☐

b. Control

☐


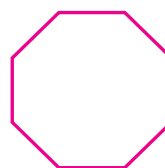
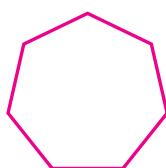
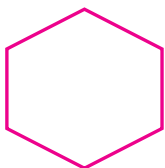
c. Motion

☐

d. None of these

☐

B. Identify the below figures and write their names.




1. 2. 3. 4.

C. Fill in the blanks using the hints given below:

Hints: Motion, Set pen color to, Anti-clockwise direction

1. block changes pen colour based on your choice from colour picker.

2. The  degrees block will turn the Sprite in by the specified number of degrees.

3. The Turn block is under the blocks menu.