

Worksheet

1

Name:

Roll No: Class: Section:

Date:

EVOLUTION OF COMPUTERS

Chapter-1

A. Tick (✓) the correct option.




- Which generation of computers have used IC?

a. Second generation	<input type="checkbox"/>	b. Third generation	<input type="checkbox"/>
c. Flip	<input type="checkbox"/>	d. Fourth generation	<input type="checkbox"/>
- Early man carved marks on in order to keep the records.

a. computer	<input type="checkbox"/>	b. clay	<input type="checkbox"/>
c. calculator	<input type="checkbox"/>	d. Abacus	<input type="checkbox"/>
- Which of these was the first microprocessor?

a. Intel 4004	<input type="checkbox"/>	b. 8086	<input type="checkbox"/>
c. Intel 8085	<input type="checkbox"/>	d. None of these	<input type="checkbox"/>

B. Identify the below components and write their names.



-
-
-
-

C. Fill in the blanks using the hints given below:

Hints: Mark-I, Magnetic tapes, Tabulating machine

- was invented by Herman Hollerith.
- were used by second generation computers.
- was the name of first electromechanical computer.