

Worksheet

2

Name:

Roll No: Class: Section:

Date:

NATURAL AND ARTIFICIAL THINGS

Chapter-1

A. Match the following:


1. Robot

a.




2. Washing Machine

b.



3. Air Conditioner

c.




4. Car

d.



B. Circle the natural things with a green colour and the man-made things with a red colour.



C. Answer in one word.

1. Name a machine that can do sums to learn math.

.....

2. Name a machine that is used to sharpen your pencil.

.....

3. Name a machine that can be used for travelling.

.....

4. Name a machine that can be used to make juice.

.....