

Worksheet

1

Name:

Roll No: Class: Section:

Date:


COMPUTER—A MACHINE

Chapter-1

A. Tick (✓) the correct option.

1. Which of the following sharpens a pencil?

a.


☐

b.



c.


☐

2. Which machine keeps room cool?

a.


☐

b.



c.


☐

3. Which of these is a man-made thing?

a.


☐

b.



c.


☐

B. Fill in the blanks using the hints given below:

Hints: Bicycle, man-made, Smart


1. A moves when we push the pedal.

2. Crayons are things.

3. Computer is a machine used to do many tasks.

C. Circle the things which are natural and Cross the man made things.


1.



2.



3.



4.

