

Worksheet

Name:











Roll No: Class: Section:

Date:

VISUAL PROCESSING

Chapter-6

A. Find the odd one out.

- | | | | |
|--|--|---|--|
| 1.  |  |  |  |
| 2.  |  |  |  |
| 3.  |  |  |  |

B. Answer the following questions.

1. What is visual processing?

.....

2. How do Directions and Maps help us?

.....

C. Spot any 5 differences.



- | | |
|---------|---------|
| 1. | 2. |
| 3. | 4. |
| 5. | |