

Worksheet

1

Name:

Roll No: Class: Section:

Date:

EXPLORING MATH WITH CODING

Chapter-7

A. Write 'T' for true and 'F' for false.

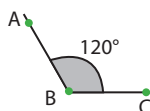
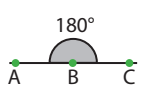
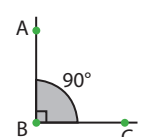
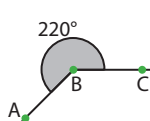
1. Strictly Less operator is used if the left value is less than the right value.
2. When an angle measure 270 degrees, it will be called as an Obtuse angle.
3. Run button is used to get the result of the program.

B. Match the following:

Column A

1. Straight Angle
2. Reflex Angle
3. Obtuse Angle
4. Right Angle

Column B

- a. 
- b. 
- c. 
- d. 

C. Answer the following questions:

1. What do you understand by the term Nested if-else statements? Also write a program to illustrate it.
.....
.....
2. Define angle and its types.
.....
.....