

Worksheet

Name:
Roll No: Class: Section:
Date:

EVOLUTION OF COMPUTERS

Chapter-1

A. Tick (✓) the correct option.

1. Who created Analytical Engine?

a. Blaise Pascal

☐

b. Bill Gates

☐

c. Charles Babbage

☐

d. John Mauchly

☐

2. Which was the first mechanical calculator?

a. Abacus

☐

b. Pascaline

☐

c. Analytical Engine

☐

d. Step Reckoner

☐

3. ENIAC was invented by and John Mauchly.

a. Presper Eckert

☐

b. Howard Aikens

☐




c. Lady Ada Lovelace

☐

d. Blaise Pascal

☐

B. Identify the images and write their names in the blanks given below:



1.

2.

3.

C. Write the full form of the following:

1. UNIVAC

2. ENIAC

3. IC

4. VLSI