

# Worksheet

1

Name: .....

Roll No: ..... Class: ..... Section: .....

Date: .....

## GUI OPERATING SYSTEM—AN INTRODUCTION

### Chapter-2

#### A. Tick (✓) the correct option.

1. Which of these is a moving pattern or animation on the screen?
 



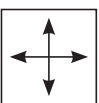

|  |  |
|--|--|
| a. Background <input type="checkbox"/> | b. Screen saver <input type="checkbox"/> |
| c. Icon <input type="checkbox"/>       | d. Wallpaper <input type="checkbox"/>    |
2. Which of these is a long bar at the bottom of the desktop?
 

|  |                                      |
|--|--------------------------------------|
| a. Clock <input type="checkbox"/>        | b. Taskbar <input type="checkbox"/>  |
| c. Start button <input type="checkbox"/> | d. Menu bar <input type="checkbox"/> |
3. Which of these is a mouse pointer used for pointing and selecting?
 

|                                    |   |
|------------------------------------|---|
| a. Busy <input type="checkbox"/>   | b. Normal <input type="checkbox"/>              |
| c. I-Beam <input type="checkbox"/> | d. Double-headed arrow <input type="checkbox"/> |
4. .... helps to quickly open files or folders by double-clicking on them.
 

|                                     |  |
|-------------------------------------|--|
| a. Taskbar <input type="checkbox"/> | b. Icons <input type="checkbox"/>        |
| c. Gadgets <input type="checkbox"/> | d. Start button <input type="checkbox"/> |

#### B. Match the following mouse pointer shapes with their functions:

- |  |   |
|--|---|
| 1.  | a. Used for pointing and dragging the items |
| 2.  | b. Used for moving pictures                 |
| 3.  | c. Computer is busy and wants you to wait   |
| 4.  | d. Used for inserting text in a document    |