



ASSIGNMENT-4



Marks Obtained: _____

Student's Name: _____ Section: _____

Roll Number: _____ Date: _____

A. Count and Tick more or less a directed.

1. Tick (✓) more.









2. Tick (✓) less.



3. Tick (✓) less.



B. Count the number of fruits in each row. Draw a line to match it with the correct number.

Column I	Column II
1. 	(a) 10
2. 	(b) 13
3. 	(c) 7
4. 	(d) 4
5. 	(e) 12
6. 	(f) 8