



ASSIGNMENT-8



Marks Obtained: _____

Student's Name: _____ Section: _____


Roll Number: _____ Date: _____

A. How many balloons are left? Draw them.


1.		-		=	
2.		-		=	
3.		-		=	
4.		-		=	

B. Subtract and match.


1. $17 - 13 = \square$




2. $19 - 12 = \square$



3. $18 - 15 = \square$



4. $16 - 11 = \square$



5. $20 - 14 = \square$

