



ASSIGNMENT-11



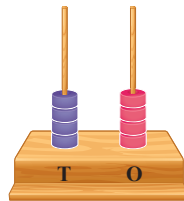
Marks Obtained: _____

Student's Name: _____ Section: _____

Roll Number: _____ Date: _____

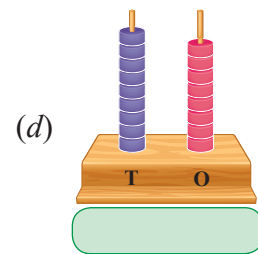
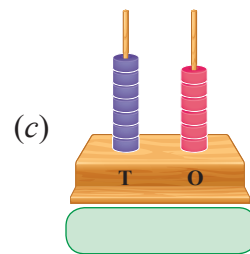
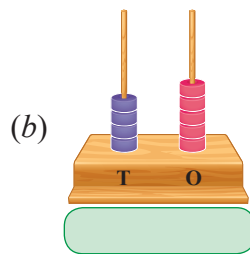
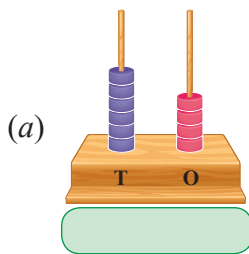
Choose the correct answer.

- Write Missing Numbers 35, 40, 45, , 55, 60,..... , 70
 (a) 50 and 65 (b) 35 and 40 (c) 50 and 60 (d) 65 and 50
- I have 7 tens and no ones.
 (a) 70 (b) 17 (c) 77 (d) 75
- I am 10 more than 65.
 (a) 55 (b) 75 (c) 85 (d) 95
- Which one is greater than 48?
 (a) 55 (b) 35 (c) 15 (d) 25
- Which one is smaller than 73?
 (a) 85 (b) 90 (c) 66 (d) 73
- Which number represents by the given abacus?



- (a) 98 (b) 85 (c) 44 (d) 54

7. Which abacus is represented the number 98?



8. When we write a number as a sum of the place value of its digits, the number is said to be in
 (a) Short form (b) Expanded form (c) Face value form (d) Standard form