



ASSIGNMENT-15


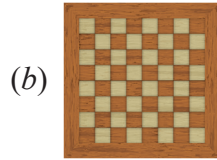
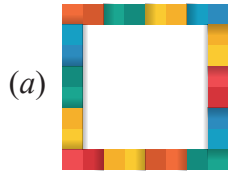


Marks Obtained: _____

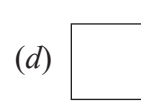
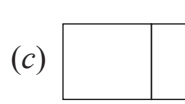
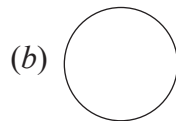
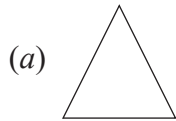
Student's Name: _____ Section: _____

Roll Number: _____ Date: _____


1. Which of the following objects is not square in shape?



2. Which of the following shapes has no corner?



3. Complete the pattern.



(a) 31

(b) 28

(c) 29

(d) 27

4. Study the pattern and choose correct answer. 50, 52, 54, 56, 58

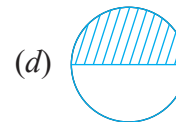
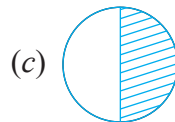
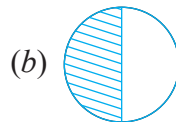
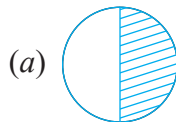
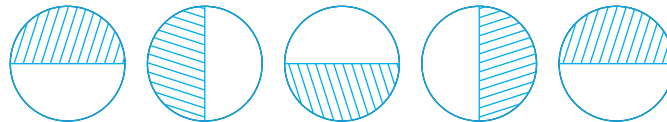
(a) Skip counting by 2

(b) Skip counting by 5

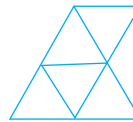
(c) Skip counting by 3

(d) Skip counting by 1

5. Choose the correct option that completes the given pattern.



6. How many triangles are present in the given image?



(a) 5

(b) 4

(c) 6

(d) 7

7. The shape of a die is

(a) cube

(b) cuboid

(c) cylinder

(d) sphere

8. Which of the following cannot be drawn with the help of a bangle?

(a) Sun

(b) Chapati

(c) Book

(d) Ring