



ASSIGNMENT-18



Marks Obtained: _____

Student's Name: _____ Section: _____





Roll Number: _____ Date: _____

A. Look at the picture and fill in the blanks.

1. There are bunches of balloons.
2. There are balloons in each bunch.
3. There are balloons in all the bunches.
4. groups of =
5. The multiplication sentence for this situation is



B. Complete the Table Below.

Group of objects	Repeated Addition	Number of Times Repeated	Multiplication Fact
1. 	$4 + 4 + 4$		
2. 		2 times 10	
3. 			$6 \times 3 = 18$
4. 			
5. 