



ASSIGNMENT-21

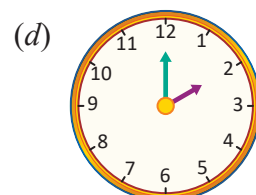
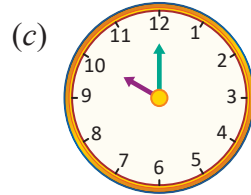
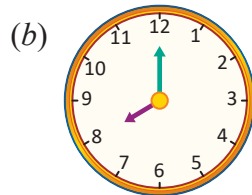
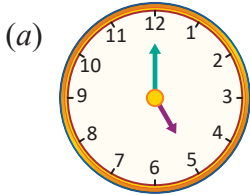


Marks Obtained: _____

Student's Name: _____ Section: _____

Roll Number: _____ Date: _____

- Juli goes out for morning walk at 6 o'clock in the morning and comes back after an hour. At what time does she come back?
 (a) 8 o'clock (b) 4 o'clock (c) 5 o'clock (d) 7 o'clock
- If a clock shows the time '8:00' then at this time, the minute hand will be at the number
 (a) 6 (b) 12 (c) 10 (d) 8
- Which day comes two days after Monday?
 (a) Friday (b) Tuesday (c) Wednesday (d) Thursday
- The fourth day of a week is Thursday. The third day of a week is Wednesday. What is the first day of a week?
 (a) Sunday (b) Monday (c) Tuesday (d) Friday
- Which day comes between Monday and Wednesday?
 (a) Friday (b) Monday (c) Tuesday (d) Saturday
- Which one of the following months is the second last month of the year?
 (a) January (b) February (c) December (d) November
- In which season would you like to sit near the fire?
 (a) Spring (b) Summer (c) Monsoon (d) Winter
- When do you have a shower?
 (a) Morning (b) Evening (c) Noon (d) Night
- Which clock shows the time to return from school?



10. In which month do we celebrate Teacher's Day?

(a) January (b) August (c) September (d) October

11. Which one of the following do we celebrate the first in a year?

