



ASSIGNMENT-24











Marks Obtained: _____

Student's Name: _____ Section: _____


Roll Number: _____ Date: _____

A. Match the following

Column I	Column II
1.  Mukesh ₹17	(a) 
2.  Manoj ₹10	(b) 
3.  Mona ₹6	(c) 
4.  Manju ₹9	(d) 

B. Answer the following.

1. How much cheaper is the apple than the ice-cream?



2. Sunita wants to purchase a doll of ₹60. Help her in counting the amount to purchase the doll.

