



# ASSIGNMENT-25



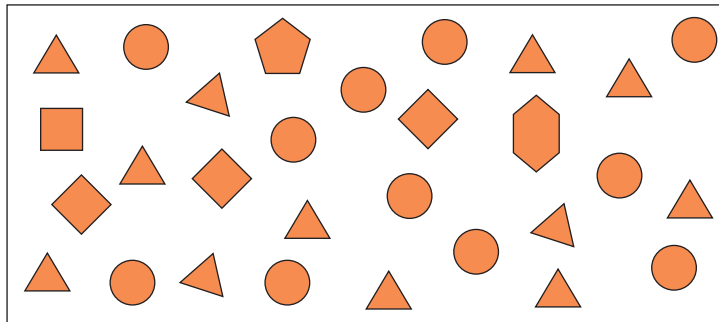
Marks Obtained: \_\_\_\_\_





Student's Name: \_\_\_\_\_ Section: \_\_\_\_\_

Roll Number: \_\_\_\_\_ Date: \_\_\_\_\_

- How many letters are there in the name SANJEEV?  
(a) 4 (b) 5 (c) 6 (d) 7
- Which name has 3 letters?  
(a) Rat (b) Butterfly (c) Ox (d) Crow
- Which colour's name has maximum letters?  
(a) Red (b) Blue (c) Purple (d) Green
- Which month's name has least number of vowels?  
(a) January (b) March (c) April (d) October

**Direction: Look at the cut-outs of shapes and answer the questions based on it.**



- Which of the shapes are 4 in number?  
(a)  (b)  (c)  (d) 
- How many more triangles are there than the circles?  
(a) 1 (b) 2 (c) 3 (d) 4
- How many cut-outs are there in all?  
(a) 31 (b) 29 (c) 26 (d) 34
- Which of the following is different from others?

