



# ASSIGNMENT-27



Marks Obtained: \_\_\_\_\_




Student's Name: \_\_\_\_\_ Section: \_\_\_\_\_

Roll Number: \_\_\_\_\_ Date: \_\_\_\_\_

On his birthday, Shivam has brought some deserts for sharing with friends.



Look at the picture of deserts and answer the following.

- How many donuts  are there in all? .....
- The donuts are shared among three friends equally. How many donuts does each friend get? .....
- Write a division fact for the distribution of donuts. ....
- How many ice creams  are there in all? .....
- The ice creams are shared among four friends equally. How many ice creams does each friend get? .....
- Write a division fact for the distribution of ice creams. ....
- If cupcakes  are shared between two friends equally, how many cupcakes will each friend get? .....
- Write a division fact for the distribution of cupcakes. ....