



ASSIGNMENT-13



Marks Obtained: _____

Student's Name: _____ Section: _____

Roll Number: _____ Date: _____

1. Which of the following shapes has been divided into two equal parts?



2. Which of the following shapes has not been divided into three equal parts?



3. Which of the following shapes has not been divided into four equal parts?

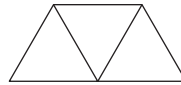


4. Which figure is shaded three-fourths?



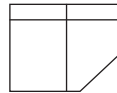
5. The given figure has been divided into

- (a) halves (b) quarters
 (c) thirds (d) none of these



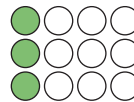
6. The given figure has been divided into

- (a) halves (b) quarters
 (c) thirds (d) none of these




7. How many are there in $\frac{1}{4}$ of a dozen?

- (a) 3 (b) 4
 (c) 6 (d) 9



8. What part of the collection is not shaded?

- (a) $\frac{1}{2}$ (b) $\frac{1}{3}$
 (c) $\frac{1}{4}$ (d) $\frac{2}{3}$



9. How many triangles have to be shaded to make it $\frac{1}{4}$ shaded?

- (a) 5 (b) 7
 (c) 3 (d) 4

