



ASSIGNMENT-14



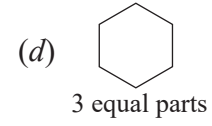
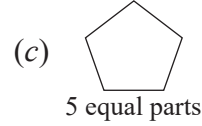
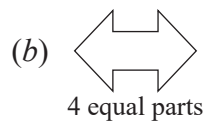
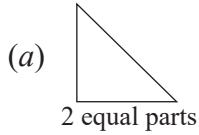
Marks Obtained: _____

Student's Name: _____ Section: _____

Roll Number: _____ Date: _____

A. Do as Directed.


1. Divide the shapes into




2. Shade one-half $\left(\frac{1}{2}\right)$ of the stars blue and remaining stars red.



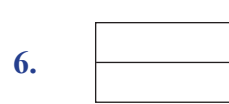
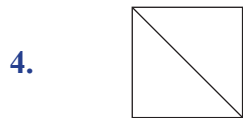
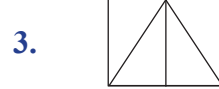
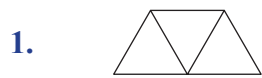
3. Shade one-third $\left(\frac{1}{3}\right)$ of the diamonds yellow and two-thirds $\left(\frac{2}{3}\right)$ of the diamonds purple.



4. Shade one-fourth $\left(\frac{1}{4}\right)$ of the hearts pink and three-fourths $\left(\frac{3}{4}\right)$ of the hearts brown.



B. Colour one part of each shape and write fraction for the shaded part.



Now, group the shapes those represent the same fraction.