







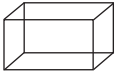















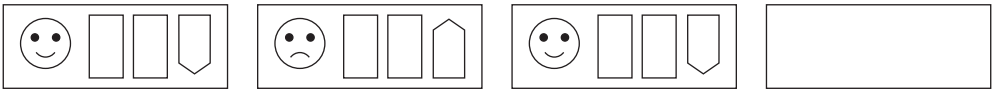
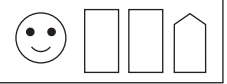
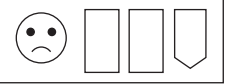





# ASSIGNMENT-15



Marks Obtained: \_\_\_\_\_

Student's Name: \_\_\_\_\_ Section: \_\_\_\_\_

Roll Number: \_\_\_\_\_ Date: \_\_\_\_\_

- Which solid shape has 1 flat face and 1 curved face?  
 (a) Cone (b) Cuboid (c) Cylinder (d) Cube
- Which solid shape has one more faces than its number of edges?  
 (a)  (b)  (c)  (d) All of these
- Which of the following solid has a rectangular base?  
 (a)  (b)  (c)  (d) 
- Which of the following is/are necessary for shadow formation?  
 (a) Light source (b) object (c) screen (d) All of these
- What will you get if you trace the base of a die?  
 (a) Triangle (b) Rectangle (c) Square (d) Circle
- How many slanting lines are there in the given figure?  
 (a) 6 (b) 10 (c) 12 (d) Cannot say 
- What will come next in the pattern?     \_\_\_\_\_  
 (a)   (b)   (c)   (d)  
- Choose the shape that completes the given pattern.  
  
 (a)  (b)  (c)  (d) 
- The shape of a matchbox is a  
 (a) Cube (b) Cuboid (c) Cylinder (d) Sphere
- A chess board has ..... black squares.  
 (a) 32 (b) 64 (c) 30 (d) 31
- Which of the following can roll, slide and stack?  
 (a)  (b)  (c)  (d) 