



# ASSIGNMENT-19



Marks Obtained: \_\_\_\_\_

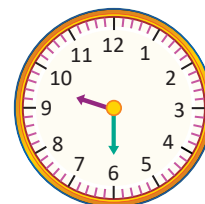
Student's Name: \_\_\_\_\_ Section: \_\_\_\_\_

Roll Number: \_\_\_\_\_ Date: \_\_\_\_\_

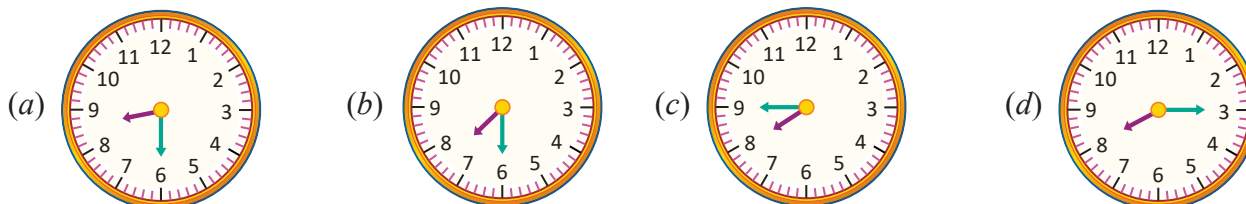
1. The clock alongside indicates the time when Manish goes to bed.

At what time does Manish go to bed?

- (a) Half past 9 in the morning
- (b) 9:30 pm
- (c) Quarter to 6 in the evening
- (d) Both (a) and (c)



2. Which clock shows quarter past 8?



3. Which month comes just after August?

- (a) October
- (b) January
- (c) September
- (d) July

4. How many months have 30 days?

- (a) 4
- (b) 5
- (c) 6
- (d) 7

5. If yesterday was Friday, then today is \_\_\_\_\_ and tomorrow will be \_\_\_\_\_.

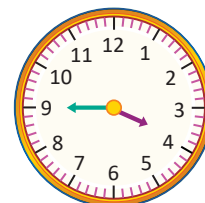
- (a) Sunday, Monday
- (b) Saturday, Sunday
- (c) Monday, Tuesday
- (d) Saturday, Monday

6. Which month has least number of days?

- (a) August
- (b) May
- (c) February
- (d) April

7. The time shown on the clock is

- (a) 4 o'clock
- (b) Quarter to 4
- (c) 9:20
- (d) 9 o'clock



8. If today is Monday, then what is the day after 2 days?

- (a) Sunday
- (b) Wednesday
- (c) Thursday
- (d) Friday

9. 60 minutes is equal to \_\_\_\_\_

- (a) one hour
- (b) two hours
- (c) half an hour
- (d) one and half hours

10. Today is Sunday. Ravi is having a maths class test on 3rd day from today. On which day will his test be?

- (a) Tuesday
- (b) Wednesday
- (c) Friday
- (d) Thursday

11. How many days are there in a leap year?

- (a) 365 days
- (b) 366 days
- (c) 266 days
- (d) 326 days

12. Today is 15 November and Harsh's birthday was 6 days ago. His birthday was on \_\_\_\_\_.

- (a) 4 November
- (b) 9 November
- (c) 10 November
- (d) 21 November