



# ASSIGNMENT-23

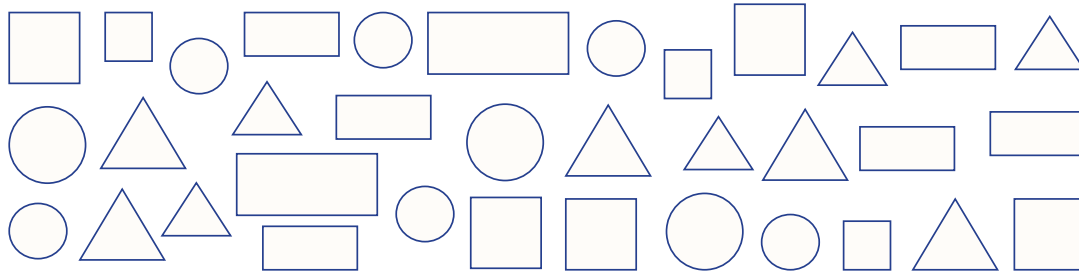


Marks Obtained: \_\_\_\_\_

Student's Name: \_\_\_\_\_ Section: \_\_\_\_\_

Roll Number: \_\_\_\_\_ Date: \_\_\_\_\_






**Direction: Look at the following collection and answer Q.1-5.**



- The number of circles in the collection is  
 (a) 5 (b) 7 (c) 9 (d) 12
- Into which two groups can these shapes be categorised?  
 (a) Shapes made with curved lines; shapes made with straight lines  
 (b) Shapes made with four lines only; shapes made with 3 lines  
 (c) Both (a) and (b) (d) cannot say
- Which shapes are equal in number?  
 (a) square and rectangle (b) square and triangle (c) triangle and rectangle (d) square and circle
- Number of shapes having slanting lines is  
 (a) 8 (b) 7 (c) 9 (d) 10
- Which type of lines are maximum in number?  
 (a) Curved line (b) Horizontal line (c) Vertical line (d) Slanting line

**Direction: Look at the following collection and answer Q6 – 8.**



- Which of the following is the same as  in number?  
 (a)  (b)  (c)  (d) 
- Number of toys which can float on water is  
 (a) 5 (b) 7 (c) 6 (d) 4
- Number of toys which can fly in the air is  
 (a) 11 (b) 8 (c) 10 (d) 12