



ASSIGNMENT-19



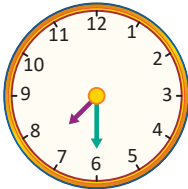
Marks Obtained: _____

Student's Name: _____ Section: _____

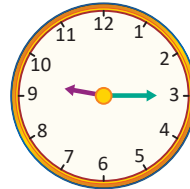
Roll Number: _____ Date: _____

Identify the correct answer.

- Sanjana went for shopping at 12:00 noon. She came back at 4:00 p.m. How much time did Sanjana spend shopping?
 (a) 3 hours (b) 2 hours (c) 4 hours (d) 1 hour
- Ajay had been waiting at the railway station for 45 minutes. The train arrived at 5:00 p.m. At what time did Ajay arrive at the railway station?
 (a) 4:30 p.m. (b) 5:45 p.m. (c) 4:45 p.m. (d) 4:15 p.m.
- Amit is 6 years old on 13/12/2023. When was he born?
 (a) 13th Dec 2018 (b) 13th Dec 2019 (c) 13th Dec 2017 (d) 13th Dec 2016
- Today is Sunday. What will be the day after 6 days from today?
 (a) Monday (b) Saturday (c) Tuesday (d) Wednesday
- One and half hour in seconds is
 (a) 5400 seconds (b) 5500 seconds (c) 5000 seconds (d) 4800 seconds
- Time shown by a clock is 1:15. It is also read as _____
 (a) Quarter past 1 (b) 45 minutes to 2 (c) 15 minutes to 1 (d) either (a) or (b)
- The given clocks show the time in the evening at which Rohan starts and finishes his homework.



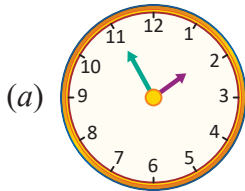
Starts homework



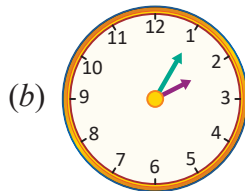
Finishes homework

How long does he take to complete his homework?

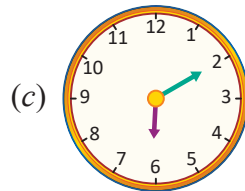
- Diya spent 28 days at summer camp. What is the total number of weeks she spent?
 (a) 4 (b) 2 (c) 5 (d) 8
- Which clock shows a time between 2:15 P.M. and 3:00 P.M.?



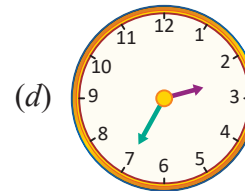
(a)



(b)



(c)



(d)

- The minute hand takes _____ minutes to move from 3 to 9.

- (a) 6 (b) 10 (c) 20 (d) 30