



ASSIGNMENT-15



Marks Obtained: _____

Student's Name: _____ Section: _____

Roll Number: _____ Date: _____

1. How many lines of symmetry does the letter "X" have?



- (a) 0 (b) 1 (c) 2 (d) 3

2. How many lines of symmetry does this shape have?

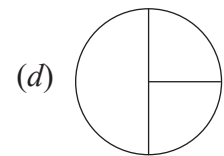
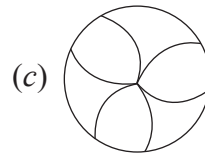
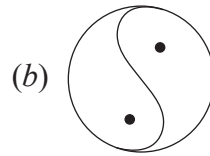
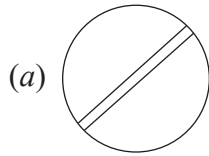


- (a) 2 (b) 3 (c) 4 (d) 6

3. How many lines of symmetry does a rectangle have?

- (a) 2 (b) 4 (c) 6 (d) 8

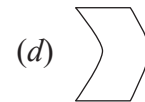
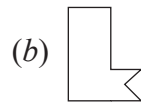
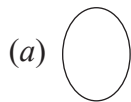
4. Which of the following is an asymmetrical figure?



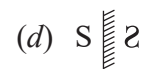
5. What will come next in the pattern? 1 2 4 7 11 _____

- (a) 14 (b) 15 (c) 16 (d) 17

6. Which of these shapes can a tile have?



7. Which of the following has been reflected?



8. Which of the following numbers will replace the '?' mark?

	8	4	
11	88	20	5
9	?	150	10
	7	15	

- (a) 16 (b) 63 (c) 60 (d) 130