



ASSIGNMENT-16



Marks Obtained: _____











Student's Name: _____ Section: _____

Roll Number: _____ Date: _____

A. Fill in the blanks.

1. A circle has lines of symmetry.
2. 5, 15, 35, 75, 155,
3. The of a rhombus is its line of symmetry.
4. 1, 8, 27, 64, 125,
5. A triangle can have atmost lines of symmetry.

B. Match the following.

Column I	Column II
<p>1. </p>	<p>(a) </p>
<p>2. </p>	<p>(b) </p>
<p>3. </p>	<p>(c) </p>
<p>4. </p>	<p>(d) </p>
<p>5. </p>	<p>(e) </p>

C. Utilise Your Brain.

At least how many blocks would you shade so that the given line is a line of symmetry of the whole figure?

