



ASSIGNMENT-13



Marks Obtained: _____

Student's Name: _____ Section: _____

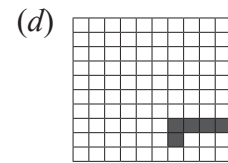
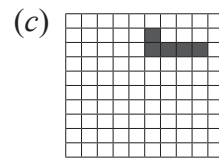
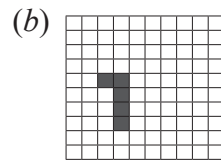
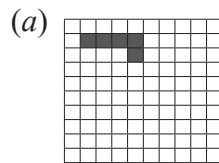
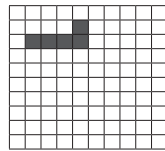
Roll Number: _____ Date: _____

Identify the correct answer.

1. Polygon : Square :: Symmetry:

- (a) Rotational (b) Shape (c) Angle (d) Line

2. Which shows reflection for the figure given below?



3. How many lines of symmetry does the figure A have?

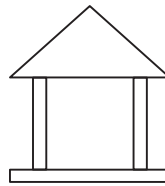


Figure A

- (a) 1 (b) 2 (c) 3 (d) 4

4. How many pictures does not have symmetry?



Figure A



Figure B



Figure C

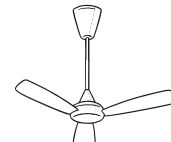


Figure D

- (a) 1 (b) 2 (c) 3 (d) 0

5. Which of the following shapes has both reflection symmetry and rotational symmetry?

- (a) Scalene triangle (b) Square (c) Parallelogram (d) Irregular pentagon