



# WORKSHEET

Name: \_\_\_\_\_

Roll No: \_\_\_\_\_

Class: \_\_\_\_\_ Section: \_\_\_\_\_ Date: \_\_\_\_\_



Chapter-1

CLASS 2

Grade:



Teacher's Signature: \_\_\_\_\_

Name: \_\_\_\_\_

Roll No: \_\_\_\_\_

Class: \_\_\_\_\_ Section: \_\_\_\_\_ Date: \_\_\_\_\_

## WORKING OF A COMPUTER

### A. Tick (✓) the correct option.

1. Which of the following do we get after a computer processes an input?

a. Process ☐ b. Input ☐ c. Output ☐

2. Which of the following performs an action on the input?

a. CPU ☐ b. Printer ☐ c. Mouse ☐

3. Which of the following is an input device?

a. Headphones ☐ b. Speakers ☐ c. Keyboard ☐

### B. Rearrange the letters to make correct option.

1. UJIERC

2. AMHCENI

3. SULTRE

4. EVIDCSE


### C. Write 'T' for true and 'F' for false.

1. Computer is a machine. ....

2. Output can be shown before processing. ....

3. Mouse is also known as the brain of the computer. ....

Name: \_\_\_\_\_

Roll No: \_\_\_\_\_

Class: \_\_\_\_\_ Section: \_\_\_\_\_ Date: \_\_\_\_\_

## IPO DEVICES

### A. Tick (✓) the correct option.

1. Which of the following is another name for a monitor?

a. Monitor ☐

b. VDU ☐

c. Television ☐

2. Which of the following has the highest storage capacity?

a. DVD ☐

b. Pen Drive ☐

c. Hard Disk ☐

3. Which of these can be used to draw a freehand drawing?

a. Hard disk ☐

b. CD/DVD ☐

c. Mouse ☐

### B. Fill in the blanks using the hints given below:

**Hints:** scanner, storage, microphone, small

1. A ..... is used to record our voice in computer.

2. CD is ..... storage device.

3. .... works like a photocopier.

4. Hard disk is an example of ..... device.

### C. Name the following:

1.



...R...NT...R

2.



M...CR...P...ON...

3.



...EA...PH...N...S

Name: \_\_\_\_\_

Roll No: \_\_\_\_\_

Class: \_\_\_\_\_ Section: \_\_\_\_\_ Date: \_\_\_\_\_

## THE KEYBOARD AND THE MOUSE

### A. Tick (✓) the correct option.

1. Which of these is not the function of a mouse?

a. typing

☐

b. clicking

☐

c. dragging

☐

2. Which of these is used for selecting an item on the computer screen?

a. Double-click

☐

b. Single-click

☐

c. None

☐

### B. Write 'T' for true and 'F' for false.

1. Shift key is used with the other keys.

.....

2. Mouse is not a pointing device.

.....


3. Functions keys are keys present at the top of the keyboard.

.....

4. Keyboard is an output device.

.....

### C. Colour the Symbol keys.



### D. Name the actions of a mouse.



.....

Name: \_\_\_\_\_

Roll No: \_\_\_\_\_

Class: \_\_\_\_\_ Section: \_\_\_\_\_ Date: \_\_\_\_\_

## INTRODUCTION TO WORD 2019

### A. Rearrange the letters to get the correct words.

1. TSARTTTUBON
2. AVES
3. ORWD
4. BALNK ODUCEMENT

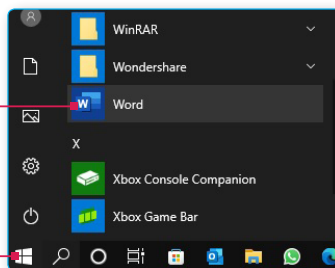
### B. Guess my name.

1. I am used to close Word app. ....
2. I am used to save your work for future use. ....
3. I am the white area where you type. ....
4. I am the bar that displays the name of the file. ....

### C. Complete the steps to start word 2019.

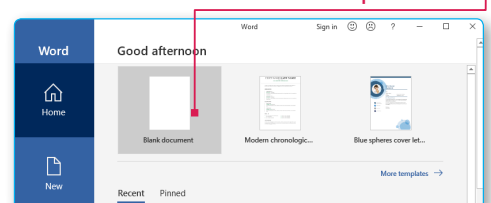
2 Scroll down to 'W' and select ..... .

1 Click on the ..... button on the taskbar.



Click on the ..... option.

3



Name: \_\_\_\_\_

Roll No: \_\_\_\_\_

Class: \_\_\_\_\_ Section: \_\_\_\_\_ Date: \_\_\_\_\_

## LET'S LEARN PAINT

### A. Tick (✓) the correct option.

1. Paint is a ..... program.

a. playing

☐

b. dancing

☐

c. drawing

☐

2. Which of these is used to select the thickness of line?

a. Size

☐

b. Curve

☐

c. Image

☐

3. Which of these can be used to draw a freehand drawing?

a. Colorpicker tool

☐

b. Color tool

☐

c. Pencil tool

☐

### B. Write 'T' for true and 'F' for false.

1. In Paint, curve shape is used to make curve lines.

.....

2. You cannot draw a square in paint.

.....

3. You cannot move a drawing in paint.

.....

4. You cannot draw shapes in paint.

.....

### C. Name the tools used to do the following.

1. To draw a curved line.

.....

2. To type text.

.....

3. To draw a polygon.

.....

4. To draw circle.

.....

### D. Match the following.

1. Title Bar

a. Tools

2. Home

b. Select

3. Image

c. Name of the drawing

Name: \_\_\_\_\_

Roll No: \_\_\_\_\_

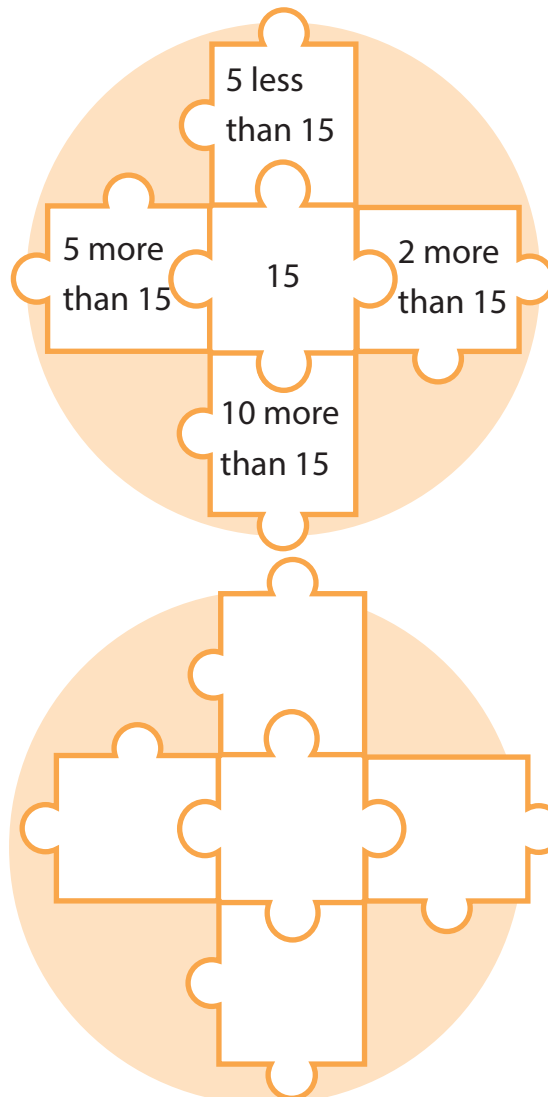
Class: \_\_\_\_\_ Section: \_\_\_\_\_ Date: \_\_\_\_\_

## REASONING AND ANALYSIS

### A. Tick (✓) the correct option.

- How many directions are there to help us to define the route to our destination?  
 a. 4 ☐      b. 5 ☐      c. 3 ☐
- If a number has 7 tens and 12 ones, then the number is .....  
 a. 27 ☐      b. 72 ☐      c. 82 ☐

### B. Read the instruction and solve the puzzle.



Name: \_\_\_\_\_

Roll No: \_\_\_\_\_

Class: \_\_\_\_\_ Section: \_\_\_\_\_ Date: \_\_\_\_\_

## MORE ON SCRATCHJR

### A. Identify the given blocks and write their names.



.....



.....



.....



.....

### B. Write 'T' for true and 'F' for false.

1. Motion blocks are used to control the sound functions.
2. Sound Blocks move a character.
3. Control Blocks are used to repeat and pause the character.
4. Looks blocks are used to modify the character's costumes and colours.

### C. Complete the steps to start word 2019.

- |                   |   |
|-------------------|---|
| 1. Motion Blocks  | a. To repeat and pause the character              |
| 2. Looks Blocks   | b. To control the sound functions                 |
| 3. Sound Blocks   | c. To modify the character's costumes and colours |
| 4. Control Blocks | d. To move a character                            |



Name: \_\_\_\_\_

Roll No: \_\_\_\_\_

Class: \_\_\_\_\_ Section: \_\_\_\_\_ Date: \_\_\_\_\_

## ARTIFICIAL INTELLIGENCE AROUND US

### A. Tick (✓) the correct option.

1. Which of the following is task associated with a robot?

a. Bathing ☐ b. Packing ☐ c. Eating ☐

2. Which of the following is not the ability of a computer or a machine?

a. Learn ☐ b. Think ☐ c. Sleep ☐

### B. Name the following:

1. R  B  T



2. G   G  E M  P S



Google Maps

3.  I  I



### C. Answer in one word.

1. Name the technology that is used to unlock the phone using face ID.

.....

2. Which feature is used to avoid traffic?

.....

3. Name the machine that helps in cooking and cleaning.

.....