

Name: _____

Roll No: _____

Class: _____ Section: _____ Date: _____

A COMPUTER SYSTEM

Chapter-1

CLASS 3

A. Tick (✓) the correct option.

1. Which of these is not a software?

a. Word

☐

b. Paint

☐

c. Hard disk

☐

d. Excel

☐

2. Which of these is the version of Microsoft Windows?

a. Windows 10

☐

b. Mac

☐

c. Linux

☐

d. Unix

☐

3. Which software helps us perform a specific type of job?

a. Application

☐

b. System

☐

c. Both a and b

☐

d. None of these

☐

B. Write 'T' for true and 'F' for false.

1. Software helps us to give input to the computer hardware.

2. Operating system is an example of system software.

3. Hardwares are those parts of a computer that you cannot touch.

C. Fill in the blanks using the correct words.

1. (Pen drive/Operating system) is a hardware part of a computer.

2. (Hard disk/Scanner) is present inside the CPU box.

3. The system software (controls/stops) the working of the computer.

D. Match the following:

1. Input device

a. Windows 10

2. Operating system

b. Printer

3. Hardware

c. Keyboard

Grade:



Teacher's Signature: _____

Name: _____

Roll No: _____

Class: _____ Section: _____ Date: _____

A COMPUTER SYSTEM

Chapter-1

CLASS 3

A. Find the given words in the following grid:

Hints: Keyboard, Joystick, Hard Disk, Printer, Pen Drive, Plotter, Mouse, Monitor, DVD

A	U	V	J	A	G	R	J	K	P
A	D	P	R	I	N	T	E	R	L
P	O	E	U	T	R	W	W	M	O
M	O	N	I	T	O	R	Y	O	T
A	V	D	B	C	X	Z	F	U	T
H	A	R	D	D	I	S	K	S	E
F	N	I	I	K	L	I	O	E	R
C	D	V	D	G	H	T	E	O	L
E	K	E	Y	B	O	A	R	D	I
J	O	Y	S	T	I	C	K	I	O

B. Answer the following questions:

1. What is the role of CPU?

.....

2. What is an IPO cycle?

.....

3. Define Application software. Give an example.

.....

Grade:



Teacher's Signature: _____

Name: _____

Roll No: _____

Class: _____ Section: _____ Date: _____

COMPUTER MEMORY

Chapter-2

CLASS 3

A. Tick (✓) the correct option.

1. How much data can a normal CD store?

a. 7 Gigabytes

☐

b. 700 Megabytes

☐

c. 25 Gigabytes

☐

d. None of these

☐

2. The basic unit for measuring the memory of a computer is

a. Nibble

☐

b. Kilobyte

☐

c. Byte

☐

d. MB

☐

3. Which of the following is known as temporary memory?

a. ROM

☐

b. RAM

☐

c. Hard Disk

☐

d. None of these

☐

B. Answer in one word.

1. Binary digits – 0s and 1s are called?

2. How many bits does 1 byte have?

3. What is the full form of PROM?

4. What is the other name for Secondary Memory?

C. Write 'T' for true and 'F' for false.

1. ROM is a volatile Memory.

2. CD is an example of Secondary Memory.

3. A group of 4-bits is called a nibble.

4. 1 Terabyte is equal to 1024 Gigabytes.

Grade:



Teacher's Signature: _____

Name: _____

Roll No: _____

Class: _____ Section: _____ Date: _____

COMPUTER MEMORY

Chapter-2

CLASS 3

A. Find the given words in the crossword given below.

Byte, Pendrive, DVD, Megabyte, Cloud

T	Y	U	H	K	K	N	B	M	F	V
S	R	T	U	U	I	B	Y	T	E	B
N	P	M	H	F	X	H	J	I	T	E
Z	E	V	M	E	G	A	B	Y	T	E
B	N	J	G	T	D	X	V	B	J	I
E	D	B	N	C	L	O	U	D	V	U
K	R	D	T	Y	B	V	V	J	U	T
W	I	Z	C	V	B	N	D	M	I	R
Z	V	F	R	T	U	I	V	N	M	K
C	E	V	H	U	Y	U	D	B	J	I
X	V	Y	B	N	M	J	F	H	I	D

B. Answer the following questions:

1. What is cloud storage? How is it better than storing files offline?

.....

2. Why is Secondary Memory important for a computer?

.....

3. What are the characteristics of a Blu-ray Disc?

.....

4. What is the use of Random-Access Memory? List the two types of RAM.

.....

Grade:



Teacher's Signature: _____

Name: _____

Roll No: _____

Class: _____ Section: _____ Date: _____

LET'S KNOW ABOUT WINDOWS 10

Chapter-3

CLASS 3

A. Tick (✓) the correct option.

- Which is the first screen that appears after switching on the computer?

a. Icons	<input type="checkbox"/>	b. Desktop	<input type="checkbox"/>
c. Taskbar	<input type="checkbox"/>	d. None of these	<input type="checkbox"/>
- Which of these is the most popular Operation system?

a. MS DOS	<input type="checkbox"/>	b. Windows 10	<input type="checkbox"/>
c. Linux	<input type="checkbox"/>	d. None of these	<input type="checkbox"/>
- can also be opened by pressing Windows key on the keyboard.

a. Start menu	<input type="checkbox"/>	b. Desktop	<input type="checkbox"/>
c. Icon	<input type="checkbox"/>	d. None of these	<input type="checkbox"/>

B. Fill in the blanks using the hints given below:

Hints: Icons, Windows 10, Taskbar, Microsoft

- A long bar at the bottom of the desktop is called the
- represent all the drives, folders and files on your computer.
- Windows 10 was developed by the company named
- has a Graphical User Interface (GUI).

C. Write 'T' for true and 'F' for false.

- Shutdown button is used to shut down the computer.
- I-beam is used to insert text in document.
- Sorting the icons means arranging the icons on the desktop.
- We cannot change the position of Taskbar.

Name: _____

Roll No: _____

Class: _____ Section: _____ Date: _____

LET'S KNOW ABOUT WINDOWS 10





Chapter-3

CLASS 3

A. Guess who am I?

- I am a mouse pointer used for pointing, selecting and dragging the items on the screen.
- I am the small pictures present on the desktop.
- I am a button used to open the start menu.
- I am a long horizontal bar present at the bottom of the desktop.

B. Look at the pictures and fill in the boxes.

-  H C
-  R Y L N
-  T R B T N
-  L R

C. Name the mouse pointer used:

- For resizing the window or pictures.
- For inserting the text in document.
- For moving the pictures.
- For pointing, selecting and dragging the items.

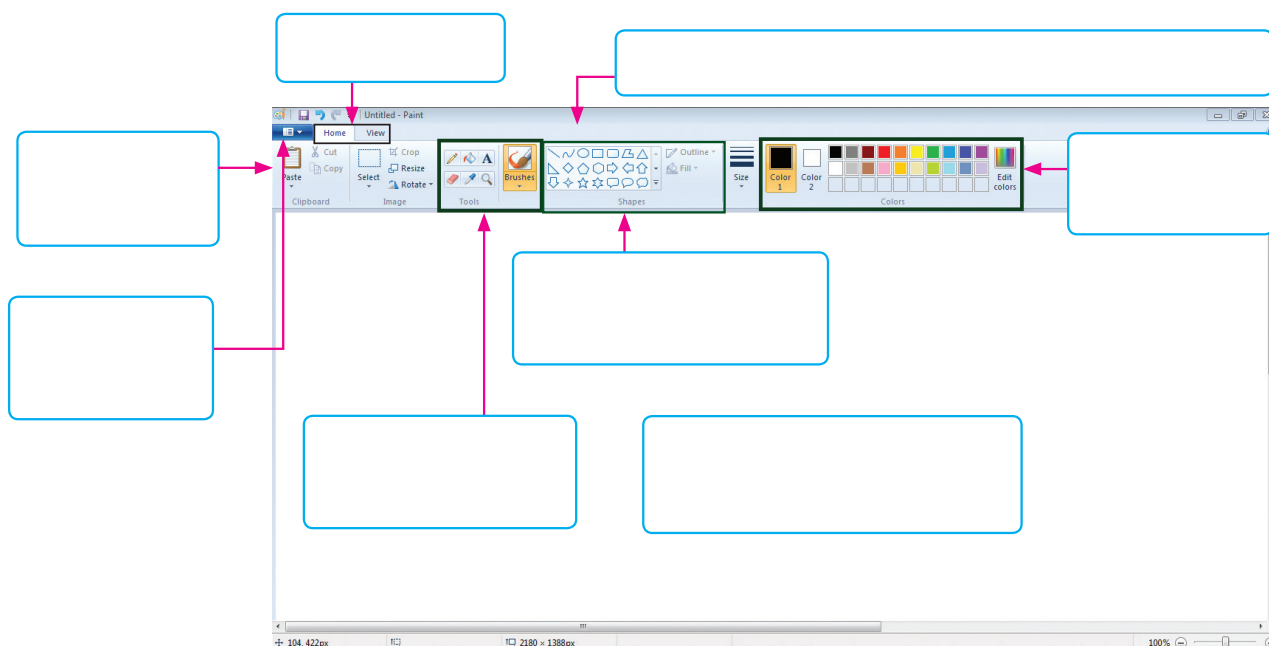
Name: _____

Roll No: _____

Class: _____ Section: _____ Date: _____

ADVANCED FEATURES OF PAINT

A. Label the components of Paint window.



B. Number the steps to save a drawing in Paint.

- ☐ 1. Type a name for the file in the File name: box
- ☐ 2. Click on Save or Save As. The Save As dialog box appears.
- ☐ 3. Click on Paint button.
- ☐ 4. Click on Save button.

C. Write 'T' for true and 'F' for false.

1. Paint program is used to play on the computer.
2. Color Picker tool is present under the Home tab.
3. Polygon shape is used to draw circles.
4. Paint allows you to draw various shapes like oval, polygon, etc.

Name: _____

Roll No: _____

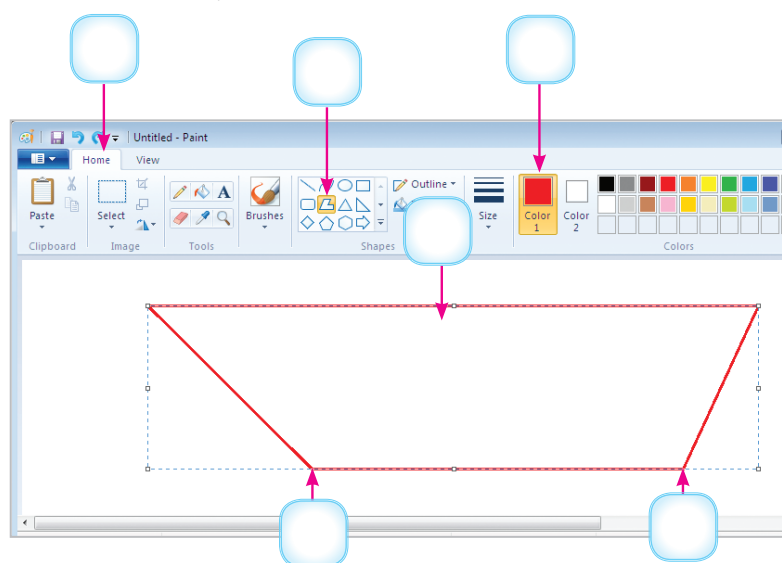
Class: _____ Section: _____ Date: _____

ADVANCED FEATURES OF PAINT

Chapter-4

CLASS 3

A. Label the steps to draw a polygon in Paint.



B. Tick (✓) the correct option.

1. Which tool is used to type text in your drawing area?

a. Text

☐

b. Brushes

☐

c. Rectangle

☐

d. None of these

☐

2. Which shape is used to draw a closed shape with straight lines?

a. Rectangle

☐

b. Polygon

☐

c. Curve

☐

d. Triangle

☐

C. Answer the following questions:

1. What is Ribbon?

.....

2. Write the use of Color picker tool.

.....



Name: _____

Roll No: _____

Class: _____ Section: _____ Date: _____

MORE ON PAINT






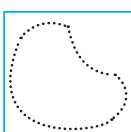
Chapter-5

CLASS 3

A. Write the shortcut keys:

1. To copy a part of the drawing
2. To Zoom In
3. To rotate an image
4. To cut a part of the drawing

B. Look at the icons and write their names.

- | | |
|--|---|
| 1.  | 2.  |
| 3.  | 4.  |
| 5.  | 6.  |

C. Answer the following questions:

1. Write the use of Rotate Command.
.....
2. What is the use of Flip image?
.....
3. Write the steps to select an image in rectangular form.
.....

Name: _____

Roll No: _____

Class: _____ Section: _____ Date: _____

MORE ON PAINT

Chapter-5

CLASS 3

A. Tick (✓) the correct option.

1. To get the mirror image of a drawing, we use command.

a. Skew

☐

b. Resize

☐

c. Flip

☐

d. Image

☐

2. Which command gives a closer and bigger look of an image?

a. Crop

☐

b. Skew

☐

c. Zoom

☐

d. None of these

☐

3. Which command is used to change the position of an image?

a. Resize

☐

b. Flip

☐

c. Crop

☐

d. Zoom

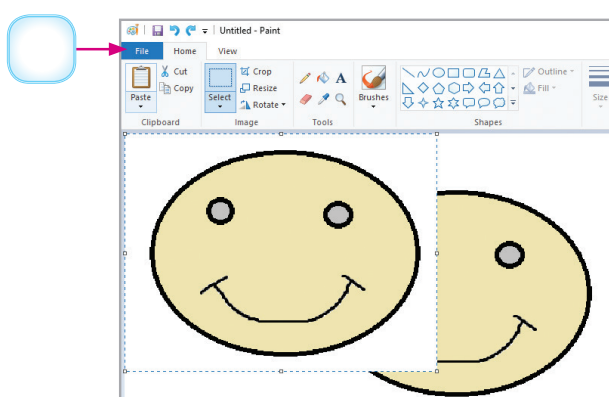
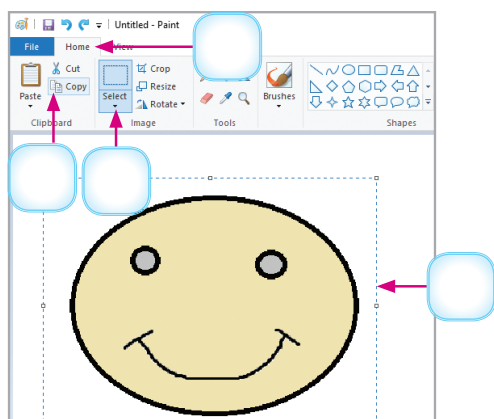
☐

B. Write 'T' for true and 'F' for false.

1. Cut and Paste commands delete the image from one place and paste it to another place.

2. Zoom tool is used to get the closer and bigger look of the drawing.

C. Label the steps to Copy/Cut and Paste the image in Paint.



Name: _____

Roll No: _____

Class: _____ Section: _____ Date: _____

INTRODUCTION TO GOOGLE BLOCKLY

A. Fill in the blanks using the hints given below:


Hints: Puzzle, Bee, Run Program, Programming,

1. In Google Blockly, users play games and learn simultaneously.
2. The game teaches the user to join the blocks.
3. Stinger is a trait of
4. In Maze game, click on button to see if the stack helps the person to reach the destination or not.


B. Write the use of the following blocks:

1. 
2. 
3. 

C. Draw the icons of Puzzle game and Maze game in the space given below.



Puzzle game



Maze game

Name: _____

Roll No: _____

Class: _____ Section: _____ Date: _____

INTRODUCTION TO GOOGLE BLOCKLY

Chapter-8

CLASS 3

A. Answer the following questions:

1. How do you play Puzzle game?

.....

.....

2. What is the use of Run Program button in Maze game.

.....

.....

3. How do you play Maze game?

.....

.....

B. Identify the icons and write the names of games in the blanks.

1.



.....

2.



.....

3.



.....

C. Complete the puzzle for the given animals/birds.

1.



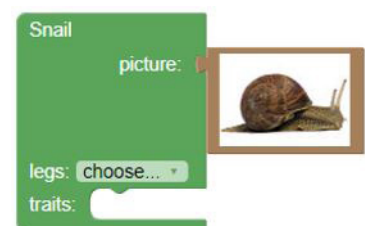
Stinger

Honey

Slime

Shell

2.



Grade: ☆ ☆ ☆ ☆ ☆

Teacher's Signature: _____