

Name: \_\_\_\_\_

Roll No: \_\_\_\_\_

Class: \_\_\_\_\_ Section: \_\_\_\_\_ Date: \_\_\_\_\_

## ALGORITHM AND FLOWCHART

Chapter-4

CLASS 5

### A. Tick (✓) the correct option.

1. Which of the following is the symbol of input and output box in a flowchart?


a.



b.



c.



d.



2. An ..... is a set of steps in a sequential manner to solve a problem or to complete a task.

a. symbol



b. start



c. algorithm



d. end



### B. Match the following symbols used in Flowchart with their names:

1. Process

a.




2. Input/Output

b.




3. Connector

c.



4. Decision

d.



### C. Fill in the blanks using the hints given below:

**Hints:** Flowchart, Connectors, Programming

1. .... are usually labelled in pairs to show matching jump points.

2. .... is step-by-step instructions to the computer.

3. A computer programmer draws a ..... before writing a computer program.

Grade:



Teacher's Signature: \_\_\_\_\_