

Name: _____

Roll No: _____

Class: _____ Section: _____ Date: _____

CREATING SHAPES IN SCRATCH




Chapter-7

CLASS 5

A. Write 'T' for true and 'F' for false.

1. A hexagon has seven sides.
2. Control block is used to draw shapes.
3. We cannot draw shapes in scratch.

B. Match the following:

- | | |
|--|--|
| 1.  | a. To duplicate the sprite's image onto the stage. |
| 2.  | b. To put sprite's pen up |
| 3.  | c. To change the pen colour based on your choice from colour picker. |

C. Answer the following questions:

1. What is total sprite trip?
.....
2. Which block is used to change the direction of the sprite?
.....
3. What is a regular polygon?
.....