

Name: _____

Roll No: _____

Class: _____ Section: _____ Date: _____

CHARTS IN EXCEL

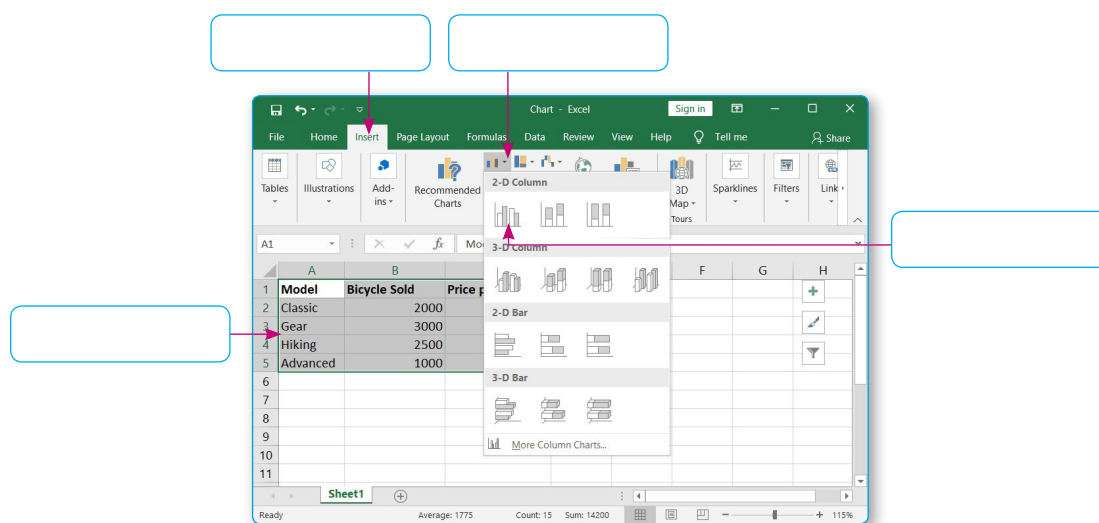
Chapter-7

CLASS 7

A. Read the clues and answer the following:

1. It is also known as value axis.
2. It is a type of charts in MS Excel that shows the correlation between two sets of values.
3. It is a key which shows the meanings of symbols and colours used in the Chart.
4. It is the another name for category axis.
5. It is represented by the bars or slices that represent the data values.

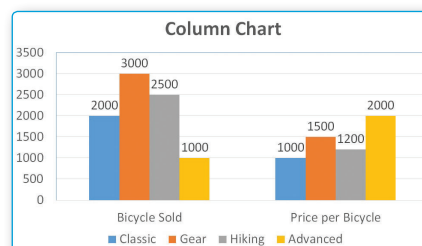
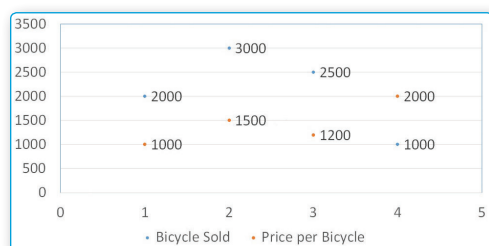
B. Write the steps to create a chart.



The screenshot shows the MS Excel interface with the 'Insert' tab selected. The 'Charts' group is expanded, showing various chart types. A data table is visible in the background:

Model	Bicycle Sold	Price per Bicycle
Classic	2000	3000
Gear	3000	2500
Hiking	2500	2000
Advanced	1000	1500

C. Identify the following chart type:



1.

2.