

Name: _____

Roll No: _____

Class: _____ Section: _____ Date: _____

REASONING AND CRITICAL THINKING

Chapter-7

CLASS 1

A. Match the following:


1. Triangle

a.



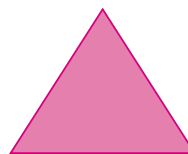
2. Square

b.




3. Circle

c.



4. Rectangle

d.



B. Answer in one word.

1. Name the tool used to draw a curve.

.....

2. How many sides does a triangle have?

.....

3. What do you call repeated designs?

.....

4. How many curved sides does a circle have?

.....

5. What do repeating shapes form?

.....

6. Name the shape with three sides.

.....