

Name: _____

Roll No: _____

Class: _____ Section: _____ Date: _____

WHAT ARE MACHINES?


A. Fill in the missing letters.

1. U S C
2. M V E
3. I F O M T N
4. I T R S

B. Write 'T' for true and 'F' for false.

1. An air conditioner makes a room cool.
2. Computer needs electricity to run.
3. Machines waste our time.
4. Computer needs instruction to do any work.

C. Draw and colour a picture of any man-made thing that works on electricity.



Name: _____

Roll No: _____

Class: _____ Section: _____ Date: _____

EXPLORING A COMPUTER

Chapter-2

CLASS 1

A. Tick (✓) the correct option.

- A computer is used at
 a. Airport ☐ b. School ☐ c. Both a and b ☐
- You can listen to on the computer.
 a. Music ☐ b. Money ☐ c. Machine ☐
- Which of the following is the feature of the computer?
 a. Diligency ☐ b. Accuracy ☐ c. Both ☐
- Computer never gets
 a. tired ☐ b. bored ☐ c. both ☐

B. Fill in the blanks with the hints given below:

Hints: colour, computer, walk, sums, works

- makes our work easier and faster.
- A computer very fast.
- Computer helps us to calculate difficult very quickly.
- We can draw and images on a computer.
- A computer cannot

C. Write 'T' for true and 'F' false.

- A computer can make mistake.
- Computer can calculate sums.
- Computer get tired very easily.

Name: _____

Roll No: _____

Class: _____ Section: _____ Date: _____

FAMILIARITY WITH COMPUTER PARTS

Chapter-3

CLASS 1

A. Tick (✓) the correct option.

- Buttons on the keyboard are called
 a. keys ☐ b. numbers ☐ c. letters ☐
- Which of these is also called Visual Display Unit?
 a. Mouse ☐ b. Monitor ☐ c. CPU ☐
- The CPU is called the of the computer.
 a. heart ☐ b. hand ☐ c. brain ☐
- Which of these looks like the monitor of the computer?
 a. Television ☐ b. Fan ☐ c. Refrigerator ☐

B. Fill in the missing letters to make the correct computer part.

- K Y A D
- S A N R
- D S A
- R T R

C. Identify and name the parts of computer.



1.

2.

3.

Grade:



Teacher's Signature: _____



Name: _____

Roll No: _____

Class: _____ Section: _____ Date: _____

LET'S USE TUX PAINT

Chapter-5

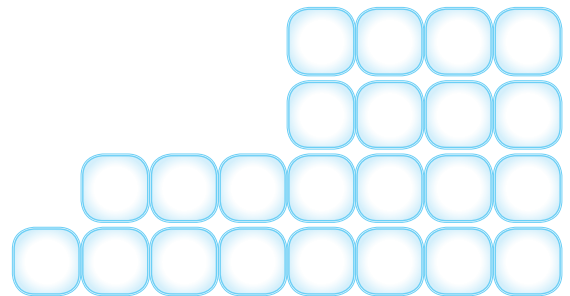
CLASS 1

A. Tick (✓) the correct option.

- Which tool is used to draw different shapes?
 - Shapes ☐
 - Lines ☐
 - Quit ☐
- Which of the following contains the drawing tools?
 - Toolbar ☐
 - Selector ☐
 - Drawing Canvas ☐
- Which of the following is used for drawing tools?
 - Toolbar ☐
 - Screen ☐
 - Shapes ☐
- Which of the following tool is used to erase the drawing from the drawing canvas?
 - Quit ☐
 - Eraser ☐
 - Paint ☐

B. Rearrange the letters to make correct words:

- LOOT
- UIQT
- EAPLTET
- IPTCUNER



C. Look at the figure given below and write the names of the tool:



1.



2.



3.



4.



5.



6.

Name: _____

Roll No: _____

Class: _____ Section: _____ Date: _____

LET'S USE PAINT

Chapter-6


CLASS 1

A. Tick (✓) the correct option.

- Which group of MS Paint contain various shapes?
 a. Shapes group ☐ b. Colors group ☐ c. View group ☐
- You can crop the unwanted area of the image using Crop button from group.
 a. Shapes ☐ b. Tools ☐ c. Images ☐
- Which of the following options is used to change the thickness of the paint brush?
 a. Size ☐ b. Brush tool ☐ c. Shapes group ☐

B. Rearrange the letters to make correct option.

- AINTP
- SLOOT
- ARESRE
- RUSHBSE



C. Write the names of the following tools:

- 
- 
- 
- 

.....

D. Fill in the blanks using hints given below:

Hints: shapes, draw, Brush, Rectangle

- We can draw various group such as line, circle etc.
- We can and fill color in drawing area.
- shape is used to draw from the shapes group.
- tool is used for free hand drawing.

Grade:



Teacher's Signature: _____