

# Worksheet

Name: .....











Roll No: ..... Class: ..... Section: .....

Date: .....

## VISUAL PROCESSING

### Chapter-6

#### A. Find the odd one out.

- |  |  |   |  |
|--|--|---|--|
| 1.  |   |   |   |
| 2.  |   |   |   |
| 3.  |  |  |  |

#### B. Answer the following questions.

- What is visual processing?  
.....
- How do Directions and Maps help us?  
.....

#### C. Spot any 5 differences.



- |         |         |
|---------|---------|
| 1. .... | 2. .... |
| 3. .... | 4. .... |
| 5. .... |         |